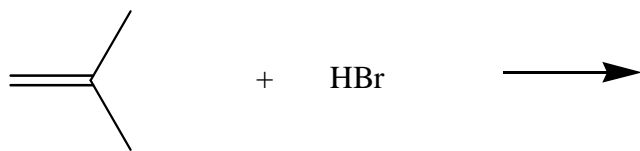
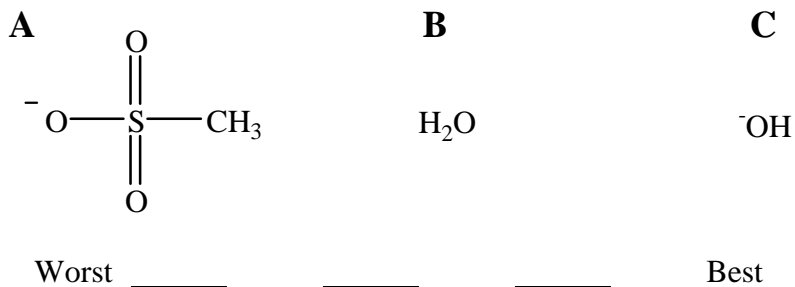


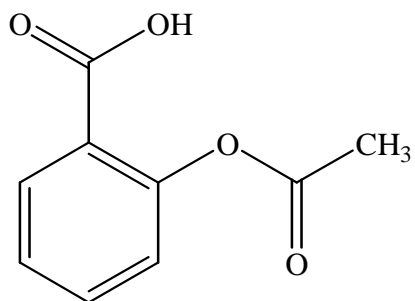
1. Draw the product of the following addition reaction.



2. Arrange the following from worst to best leaving group.



3. Label all nucleophilic and electrophilic atoms in the structure of aspirin below.



4. Draw the product(s) of the following reaction that occurs by an SN2 mechanism.

